

Write your name here

Surname

Other names

Centre Number

Candidate Number

**Pearson Edexcel  
International GCSE**

--	--	--	--	--

--	--	--	--

# Mathematics B

## Paper 2R



Thursday 9 June 2016 – Morning  
**Time: 2 hours 30 minutes**

Paper Reference  
**4MB0/02R**

**You must have:** Ruler graduated in centimetres and millimetres, protractor, compasses, pen, HB pencil, eraser, calculator. Tracing paper may be used.

Total Marks

### Instructions

- Use **black** ink or ball-point pen.
- **Fill in the boxes** at the top of this page with your name, centre number and candidate number.
- Answer **all** questions.
- Answer the questions in the spaces provided  
– *there may be more space than you need.*
- **Calculators may be used.**

### Information

- The total mark for this paper is 100.
- The marks for **each** question are shown in brackets  
– *use this as a guide as to how much time to spend on each question.*

### Advice

- Read each question carefully before you start to answer it.
- Check your answers if you have time at the end.
- Without sufficient working, correct answers may be awarded no marks.

Turn over ►

P46225A

©2016 Pearson Education Ltd.

1/1/1/1/1/



**PEARSON**



**Question 1 continued**

DO NOT WRITE IN THIS AREA

DO NOT WRITE IN THIS AREA

DO NOT WRITE IN THIS AREA

Handwriting practice area consisting of 28 horizontal dotted lines.

**(Total for Question 1 is 6 marks)**





DO NOT WRITE IN THIS AREA

DO NOT WRITE IN THIS AREA

DO NOT WRITE IN THIS AREA

**Question 2 continued**

Figure 2, below, shows the funnel placed on a sheet of metal.

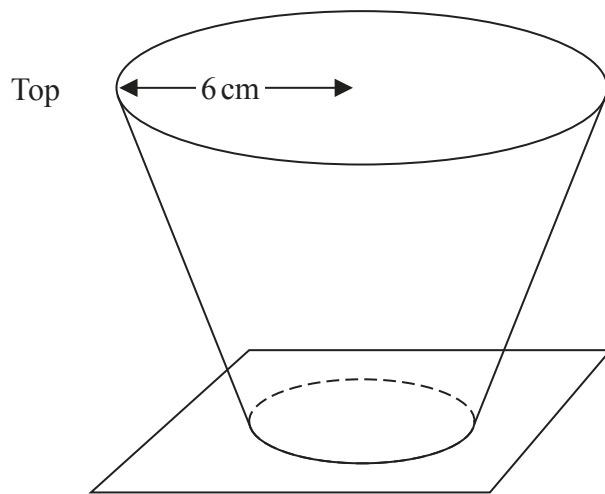


Diagram NOT accurately drawn

**Figure 2**

The funnel is completely filled with water and no water escapes from the bottom of the funnel.

The sheet of metal is suddenly removed.

Given that water flows out of the funnel at a constant rate of  $54 \text{ cm}^3/\text{s}$

(c) calculate the time, to the nearest second, to completely empty the funnel of water.

(2)

.....

.....

.....

.....

.....

.....

.....

.....

.....

.....

.....

.....

.....

.....

.....

.....

.....

.....

.....

.....

.....

.....

.....



**Question 2 continued**

Handwriting practice area consisting of 25 horizontal dotted lines.

DO NOT WRITE IN THIS AREA

DO NOT WRITE IN THIS AREA

DO NOT WRITE IN THIS AREA



**Question 2 continued**

DO NOT WRITE IN THIS AREA

DO NOT WRITE IN THIS AREA

DO NOT WRITE IN THIS AREA

Area with horizontal dotted lines for writing.

**(Total for Question 2 is 6 marks)**







**Question 3 continued**

DO NOT WRITE IN THIS AREA

DO NOT WRITE IN THIS AREA

DO NOT WRITE IN THIS AREA

Area with horizontal dotted lines for writing.

**(Total for Question 3 is 7 marks)**



- 4 In February, a motor vehicle salesman sold 600 vehicles.  
40% of these vehicles were vans.

(a) Find the number of vans sold in February.

(1)

All the other vehicles sold by the salesman in February were either lorries or cars.  
The ratio of the number of lorries sold to the number of cars sold was 1 : 4

(b) Calculate the number of lorries sold and the number of cars sold in February.

(3)

In March, the salesman sold  $\frac{1}{9}$  **more cars** than he sold in February but he sold  $12\frac{1}{2}\%$   
**fewer lorries** than he sold in February. He sold the same number of vans in March as he  
sold in February.

The salesman sold more vehicles in March than he sold in February.

(c) Express this increase as a percentage, to the nearest percent, of the total number of  
vehicles sold by the salesman in February.

(3)



**Question 4 continued**

DO NOT WRITE IN THIS AREA

DO NOT WRITE IN THIS AREA

DO NOT WRITE IN THIS AREA

Area with horizontal dotted lines for writing.

**(Total for Question 4 is 7 marks)**



5 The functions  $f$ ,  $g$  and  $h$  are defined as

$$f: x \mapsto \frac{1+x}{x} \quad x \neq 0$$

$$g: x \mapsto \frac{2}{x} \quad x \neq 0$$

$$h: x \mapsto x + 3$$

(a) (i) Express the inverse function  $f^{-1}$  in the form  $f^{-1}: x \mapsto \dots$

(ii) State the value of  $x$  which must be excluded from any domain of  $f^{-1}$

(4)

(b) Solve the equation  $hg(x) = 4f^{-1}(x)$

(5)



**Question 5 continued**

DO NOT WRITE IN THIS AREA

DO NOT WRITE IN THIS AREA

DO NOT WRITE IN THIS AREA

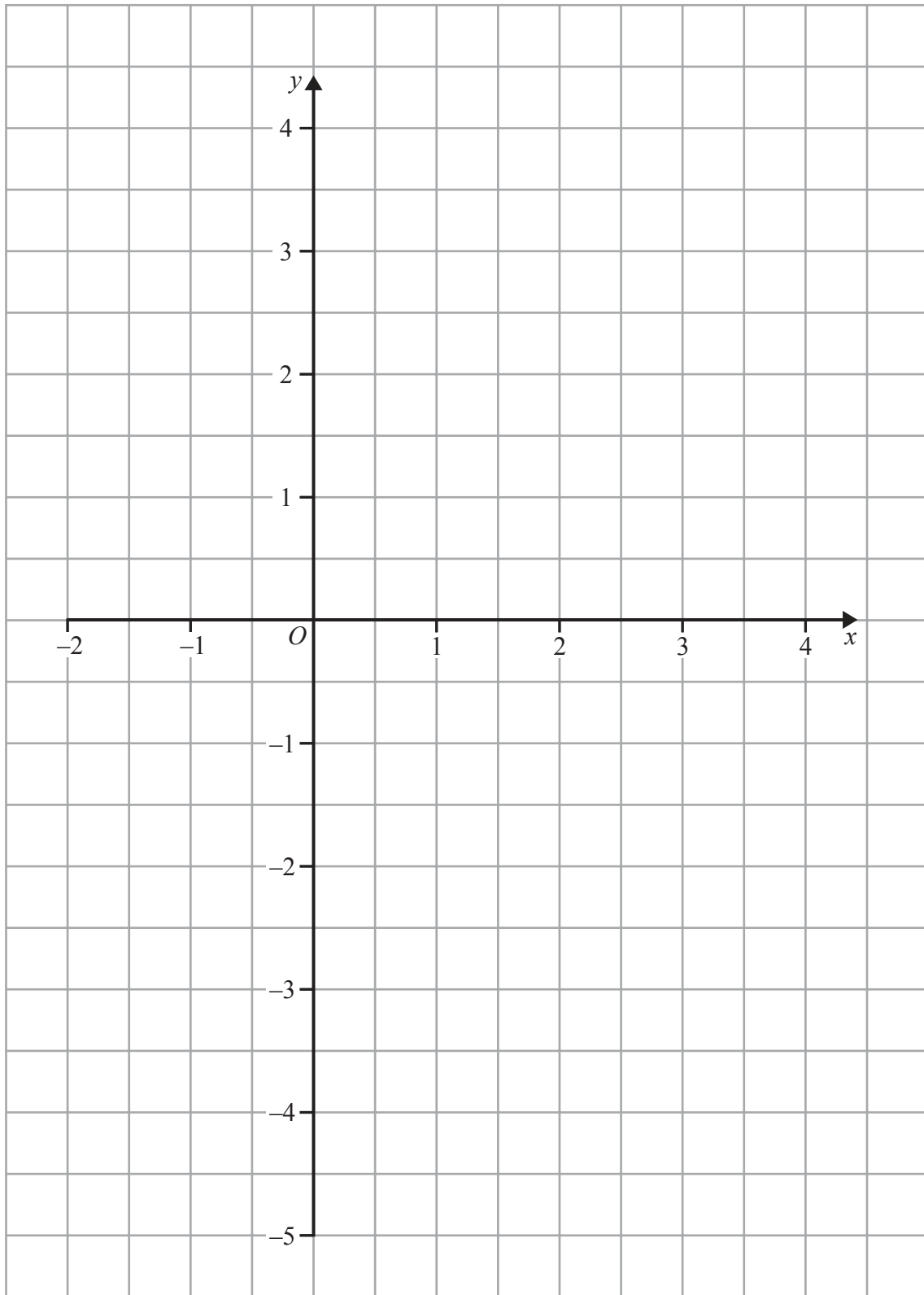
Area with horizontal dotted lines for writing.

**(Total for Question 5 is 9 marks)**





Question 6 continued



DO NOT WRITE IN THIS AREA

DO NOT WRITE IN THIS AREA

DO NOT WRITE IN THIS AREA

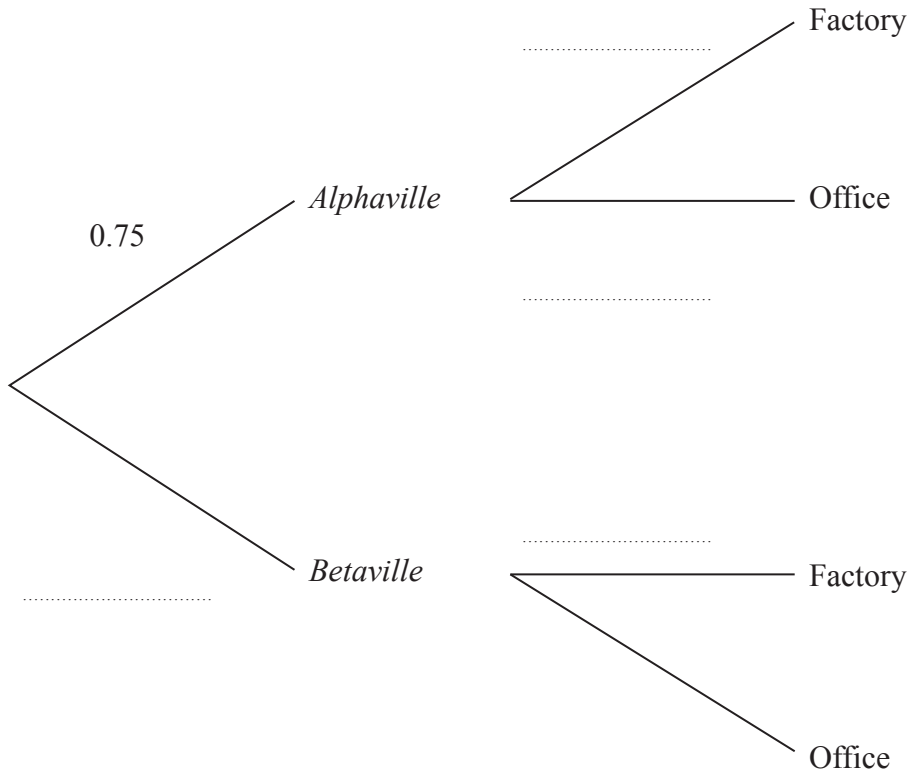
(Total for Question 6 is 10 marks)







Question 7 continued



(3)

An adult on the island is to be chosen at random.

(b) Find the probability that this adult

- (i) works in an office in *Betaville*,
- (ii) works in an office.

(5)

Given that the adult chosen works in an office,

(c) find the probability that this adult works in *Betaville*.

(3)

.....

.....

.....

.....

.....

.....

.....

.....

DO NOT WRITE IN THIS AREA

DO NOT WRITE IN THIS AREA

DO NOT WRITE IN THIS AREA



**Question 7 continued**

Area with horizontal dotted lines for writing.

DO NOT WRITE IN THIS AREA

DO NOT WRITE IN THIS AREA

DO NOT WRITE IN THIS AREA

**(Total for Question 7 is 11 marks)**



8 Make  $x$  the subject of  $t = a(b + dx)$

DO NOT WRITE IN THIS AREA

DO NOT WRITE IN THIS AREA

DO NOT WRITE IN THIS AREA

(Total for Question 8 is 3 marks)



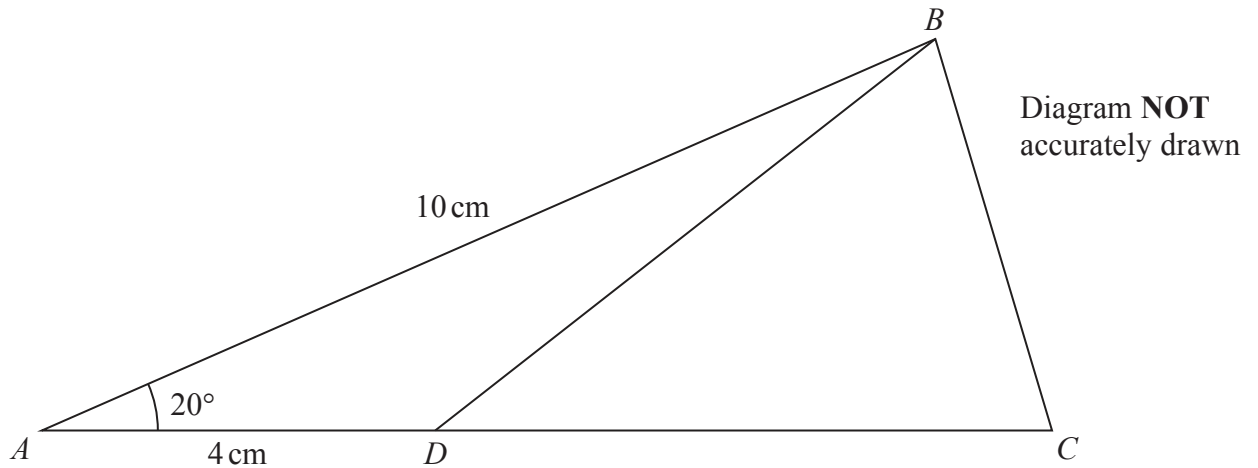


Figure 3

Figure 3 shows  $\triangle ABC$  in which  $AB = 10$  cm and  $\angle BAC = 20^\circ$

The point  $D$  lies on the line  $AC$  so that  $AD = 4$  cm and  $\angle BDA$  is obtuse.

Calculate, to 3 significant figures,

(a) the length, in cm, of  $BD$ , (3)

(b) the size, in degrees, of  $\angle BDC$ . (4)

Given that the area of  $\triangle ABC$  is  $18$  cm<sup>2</sup>

(c) calculate the length, in cm to 3 significant figures, of  $CD$ . (3)

$$\left[ \begin{array}{l} \text{Sine rule: } \frac{a}{\sin A} = \frac{b}{\sin B} = \frac{c}{\sin C} \\ \text{Cosine rule: } a^2 = b^2 + c^2 - 2bc \cos A \\ \text{Area of triangle} = \frac{1}{2}bc \sin A \end{array} \right]$$



**Question 9 continued**

DO NOT WRITE IN THIS AREA

DO NOT WRITE IN THIS AREA

DO NOT WRITE IN THIS AREA

Handwriting practice area with 25 horizontal dotted lines.



**Question 9 continued**

Area with horizontal dotted lines for writing.

DO NOT WRITE IN THIS AREA

DO NOT WRITE IN THIS AREA

DO NOT WRITE IN THIS AREA



**Question 9 continued**

DO NOT WRITE IN THIS AREA

DO NOT WRITE IN THIS AREA

DO NOT WRITE IN THIS AREA

Area with horizontal dotted lines for writing.

**(Total for Question 9 is 10 marks)**



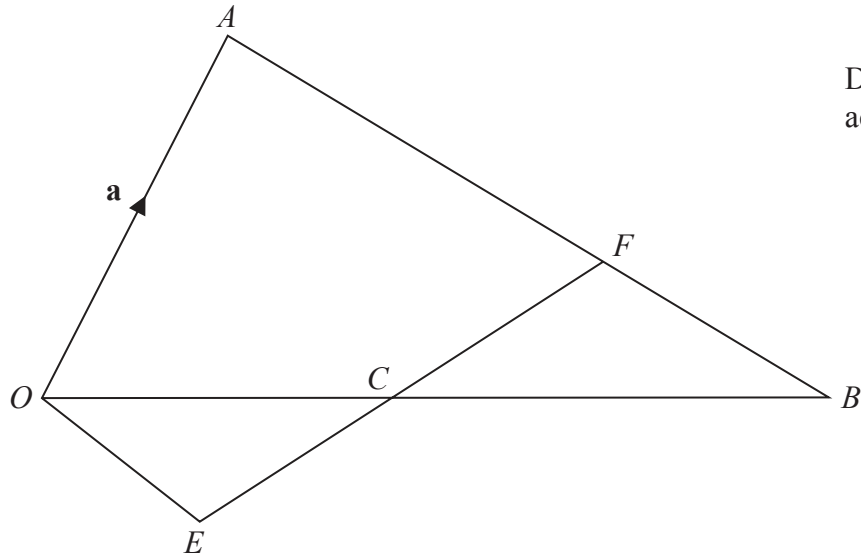


Diagram NOT accurately drawn

Figure 4

In Figure 4,  $OAB$  is a triangle.  
 The point  $C$  is the midpoint of  $OB$ .  
 The point  $F$  is on  $AB$  such that  $AF:FB = 2:1$

Given that  $\vec{OA} = \mathbf{a}$  and  $\vec{OB} = 2\mathbf{b}$

(a) find, in terms of  $\mathbf{a}$  or  $\mathbf{b}$  or  $\mathbf{a}$  and  $\mathbf{b}$ , simplifying your answers where possible,

- (i)  $\vec{AB}$     (ii)  $\vec{BC}$     (iii)  $\vec{AF}$     (iv)  $\vec{FC}$  (5)

The point  $E$  is such that  $FCE$  is a straight line so that  $\vec{FE} = \lambda\vec{FC}$ , where  $\lambda$  is a scalar.

(b) Write down an expression in terms of  $\mathbf{a}$ ,  $\mathbf{b}$  and  $\lambda$  for  $\vec{FE}$ . (1)

(c) Find and simplify an expression in terms of  $\mathbf{a}$ ,  $\mathbf{b}$  and  $\lambda$  for  $\vec{OE}$ . (2)

The point  $E$  is such that  $\vec{OE} = \mu\vec{AB}$ , where  $\mu$  is a scalar.

(d) Find the value of  $\lambda$  and the value of  $\mu$ . (6)

(e) State what can be deduced about triangles  $OCE$  and  $CFB$ . (1)

DO NOT WRITE IN THIS AREA

DO NOT WRITE IN THIS AREA

DO NOT WRITE IN THIS AREA





**Question 10 continued**

DO NOT WRITE IN THIS AREA

DO NOT WRITE IN THIS AREA

DO NOT WRITE IN THIS AREA

Handwriting practice area with 25 horizontal dotted lines.



**Question 10 continued**

Handwriting practice area with 20 horizontal dotted lines.

DO NOT WRITE IN THIS AREA

DO NOT WRITE IN THIS AREA

DO NOT WRITE IN THIS AREA



**Question 10 continued**

DO NOT WRITE IN THIS AREA

DO NOT WRITE IN THIS AREA

DO NOT WRITE IN THIS AREA

Area with horizontal dotted lines for writing.

**(Total for Question 10 is 15 marks)**



11 The equation of a curve is given by  $y = -2x^3 + 3x^2 + 2x$

(a) Complete the table of values for  $y = -2x^3 + 3x^2 + 2x$

Give your values of  $y$  to two decimal places where necessary.

$x$	-1	-0.5	-0.25	0	0.25	0.5	0.75	1	1.25	1.5	2
$y$	3	0		0	0.66	1.5	2.34	3		3	0

(2)

(b) On the grid, plot the points from your completed table and join them to form a smooth curve.

(3)

(c) Using your curve, write down the values, to one decimal place, of the  $x$  coordinates of the stationary points on  $y = -2x^3 + 3x^2 + 2x$

(2)

(d) Use your curve to estimate the range of values for  $x$ , to one decimal place, for which

$$-2x^3 + 3x^2 + 2x - 1 > 0$$

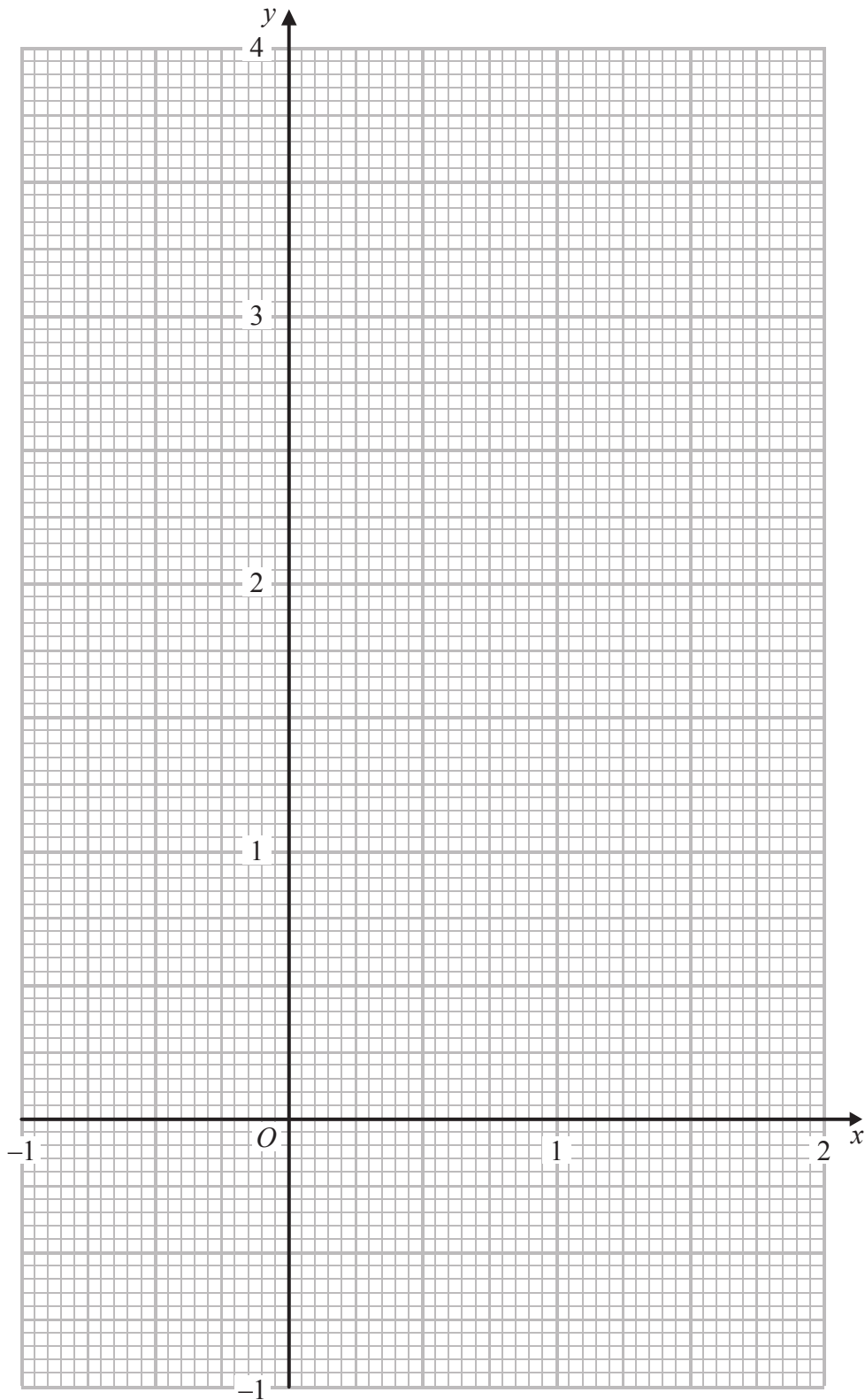
(3)

(e) By drawing a suitable straight line on the grid, find estimates, to one decimal place, of the 3 values of  $x$  which satisfy  $-2x^3 + 3x^2 + \frac{3}{2}x - 2 = 0$

(6)



Question 11 continued



Use the grid on page 31 if you need to redraw your graph.

DO NOT WRITE IN THIS AREA

DO NOT WRITE IN THIS AREA

DO NOT WRITE IN THIS AREA



**Question 11 continued**

Handwriting practice area consisting of 25 horizontal dotted lines.

DO NOT WRITE IN THIS AREA

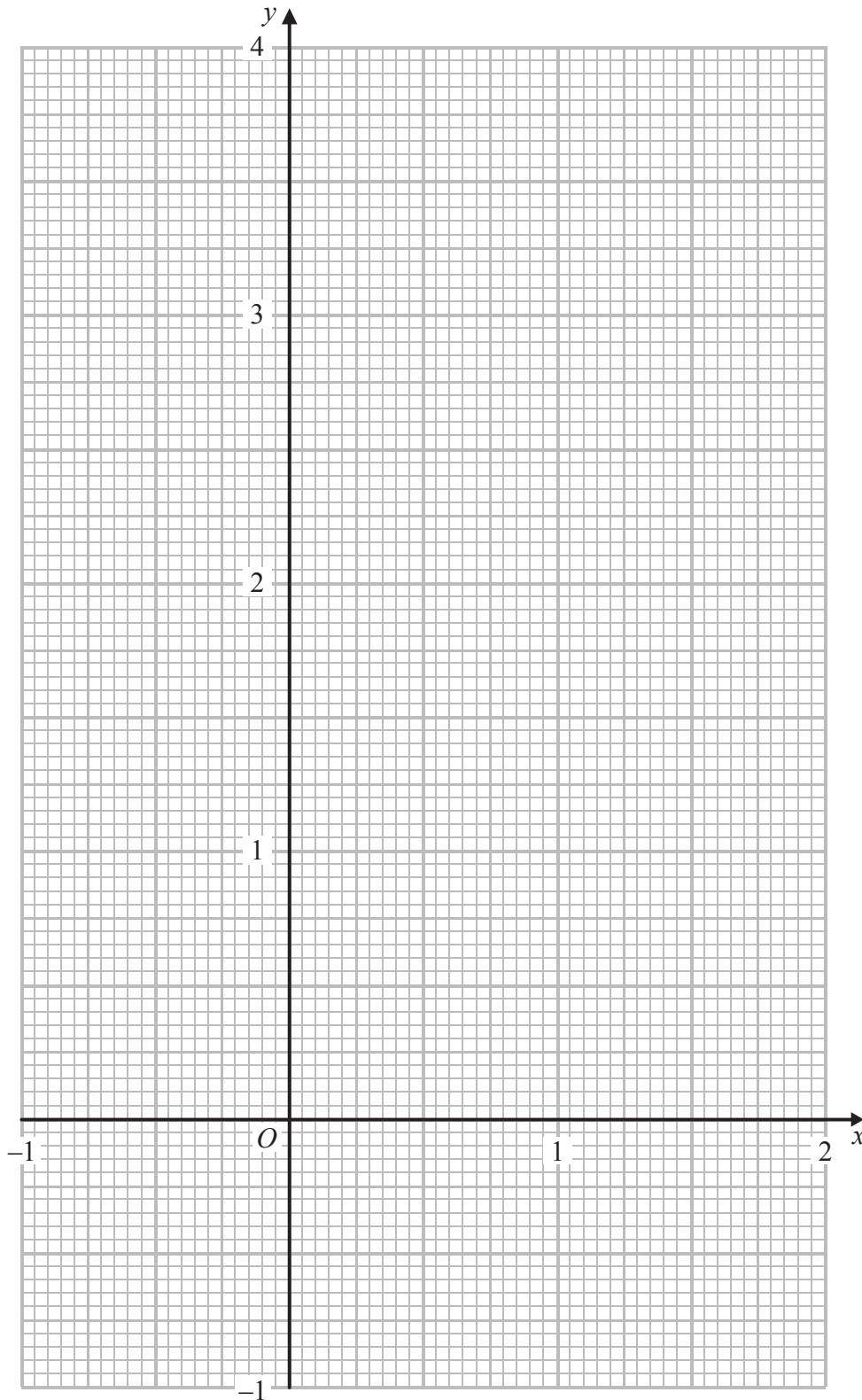
DO NOT WRITE IN THIS AREA

DO NOT WRITE IN THIS AREA



Question 11 continued

Use this grid if you need to redraw your graph.



DO NOT WRITE IN THIS AREA



**Question 11 continued**

Area with horizontal dotted lines for writing.

**(Total for Question 11 is 16 marks)**

**TOTAL FOR PAPER IS 100 MARKS**

DO NOT WRITE IN THIS AREA

DO NOT WRITE IN THIS AREA

DO NOT WRITE IN THIS AREA

